

Surname	Centre Number	Candidate Number
Other Names		2



## GCE AS/A LEVEL

2110U20-1



S19-2110U20-1

**TUESDAY, 21 MAY 2019 – MORNING**

## GEOGRAPHY – AS unit 2 CHANGING PLACES

1 hour 30 minutes

For Examiner's use only		
Question	Maximum Mark	Mark Awarded
1.	17	
2.	15	
3.	14	
4.	9	
5.	9	
<b>Total</b>	<b>64</b>	

### ADDITIONAL MATERIALS

A calculator.

### INSTRUCTIONS TO CANDIDATES

Use black ink or black ball-point pen. Do not use gel pen. Do not use correction fluid.

Write your name, centre number and candidate number in the spaces at the top of this page.

Write your answers in the spaces provided in this booklet.

Answer **all** questions in Section A and Section B.

If further space is required you should use the additional page(s) at the back of this booklet. The question number(s) should be clearly shown.

### INFORMATION FOR CANDIDATES

The number of marks is given in brackets [ ] at the end of each question or part-question; you are advised to divide your time accordingly.

**This paper requires that you make as full use as possible of appropriate examples and reference to data to support your answers. Sketch maps and diagrams should be included where relevant.**

A plain page is available near the back of the booklet for you to add any relevant sketch maps and diagrams you may wish to include. The question number(s) should be clearly shown.



MAY192110U20101

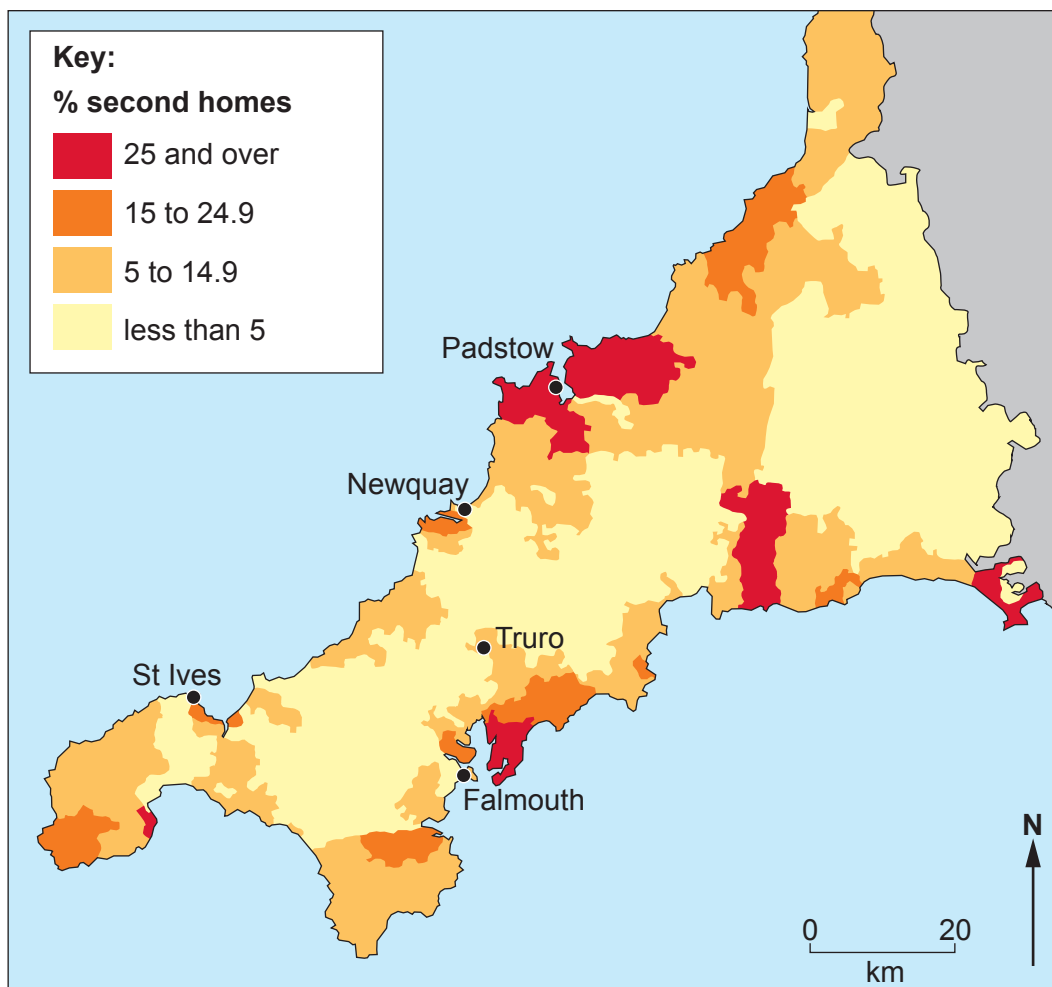
### Section A: Changing Places

Examiner only

Answer all questions.

Make the fullest possible use of examples and data to support your answers.

Figure 1: Percentage of second homes in Cornwall



Source: <http://www.savills.co.uk>

1. (a) (i) Use **Figure 1** to describe the pattern of second home ownership in Cornwall. [5]

.....

.....

.....

.....

.....



Examiner  
only

(ii) Suggest **two** challenges that could arise in the areas where the percentage of second homes is over 25%. [4]

2110U201  
03







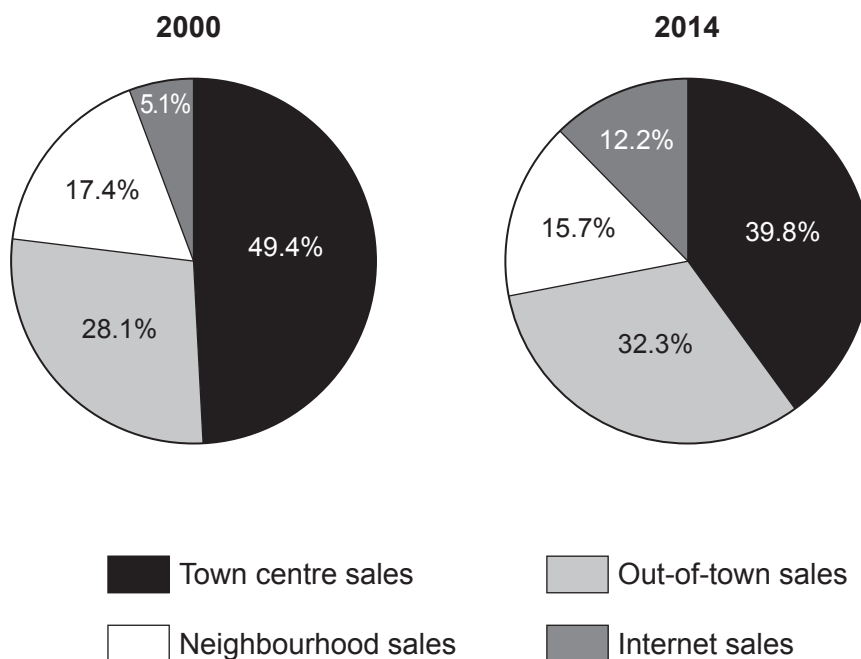
**BLANK PAGE**

**PLEASE DO NOT WRITE  
ON THIS PAGE**

2110U201  
05



**Figure 2: Location of retail spending in the UK, 2000-2014**



Source: <http://tweakyourbiz.com/marketing>

2. (a) (i) Use **Figure 2** to compare the location of retail spending in the UK in 2000 and 2014. [5]

.....

.....

.....

.....

.....

.....

.....

.....

.....

.....

.....





Examiner  
only

Additional space for question 2(b) only: .....

.....

.....

.....

.....





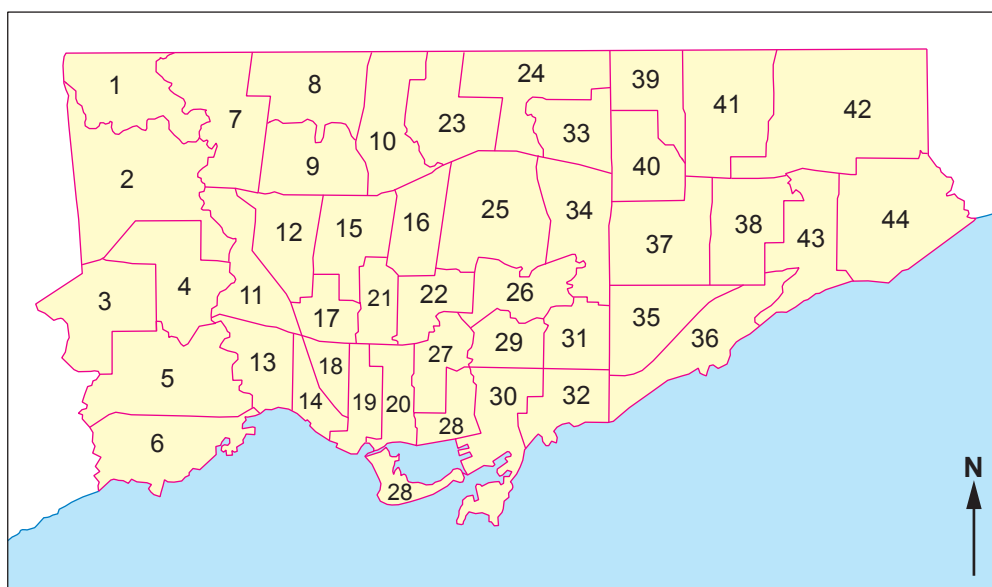
### Section B: Fieldwork Investigation in Physical and Human Geography

Answer all questions.

In your answers to Section B you should include evidence from **your** fieldwork investigations in physical geography and human geography.

A pupil collected data whilst conducting an investigation into environmental quality in the urban area of Toronto, Canada. The data was collected in 10 wards within the urban area.

**Figure 3: Map showing wards of Toronto, Canada**



3. (a) Name and justify **one** sampling technique that could be used to select the 10 wards within the urban area shown in **Figure 3** where data would be collected.

Name of sampling technique: [1]

.....

Justify your choice: [3]

.....

.....

.....

.....

.....

.....



A survey was devised to judge the quality of the environment, each statement judged between **2** (strongly agree) and **-2** (strongly disagree). Below are the results for Ward 37.

**Figure 4: Environmental Quality Survey**

**Buildings**

	<b>2</b>	<b>1</b>	<b>0</b>	<b>-1</b>	<b>-2</b>
The buildings are pleasing on the eye.			<b>x</b>		
The buildings look modern.		<b>x</b>			
The buildings show evidence that they have been well looked after.		<b>x</b>			
There is no evidence of vandalism.		<b>x</b>			

**Traffic**

	<b>2</b>	<b>1</b>	<b>0</b>	<b>-1</b>	<b>-2</b>
There is plenty of room for parking.	<b>x</b>				
The roads are generally quiet.		<b>x</b>			
No large vehicles were noted on the roads.	<b>x</b>				
The air feels free of pollution caused by traffic.	<b>x</b>				



Examiner  
only

(b) (i) Use **Figure 4** to identify the main outcomes of the environmental quality survey conducted in Ward 37. [4]

.....

.....

.....

.....

.....

.....

(ii) Assess the strengths and weaknesses of environmental quality surveys as a way of collecting data in an urban area. [6]

.....

.....

.....

.....

.....

.....

.....

.....

.....

.....

.....

.....

.....

.....

.....

.....

.....

.....

.....

.....

.....

.....

.....



Examiner  
only

Additional space for question 3(b)(ii) only: .....

.....

.....

.....

.....



**BLANK PAGE**

**PLEASE DO NOT WRITE  
ON THIS PAGE**





Examiner  
only

Additional space for question 4 only: .....

.....

.....

.....

.....







Examiner  
only

Additional space for question 5 only: .....

.....

.....

.....

.....

**END OF PAPER**



Examiner  
only

Question number	<b>Additional page, if required for diagrams. Write the question number(s) in the left-hand margin.</b>





